














You DONT have to print out this puzzle to do it.

HOW MANY IN THE SCHOOL?

INSTRUCTIONS



- LOOK AT THE FISH IN THE LEFT RED BOX.
- COUNT ALL THE FISH THAT ARE THE SAME ON THE RIGHT.
- IN THE SMALL RED BOX NEXT TO THE FISH ON THE LEFT WRITE THE NUMBER OF THE SAME FISH YOU FIND
- WHICH FISH HAS THE MOST, OR LEAST, OR IS THERE A TIE?

<input type="text"/>	
<input type="text"/>	
<input type="text"/>	
<input type="text"/>	
<input type="text"/>	
<input type="text"/>	
<input type="text"/>	
<input type="text"/>	
<input type="text"/>	
<input type="text"/>	
<input type="text"/>	
<input type="text"/>	
<input type="text"/>	
<input type="text"/>	